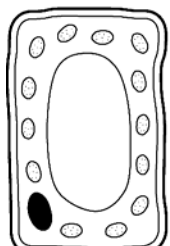


7A.3 What cells are like

Activity 1

Describing cells

- 1 Complete the sentences.
All living things are made of _____ .
Cells are very small so you need a _____ to see them.
- 2 Look at these drawings of plant cells and animal cells. Then complete the sentences.



Plant cell



Animal cell

- a** One way that a plant cell is different from an animal cell is

- b** Another way that a plant cell is different from an animal cell is

What each part of a cell does

- 3 Complete this table to show what each part of all cells does.

Choose from these words:

nucleus

cell membrane

cytoplasm

Cell part	The job that the cell part does
	Controls what passes in and out of the cell.
	Is the place where most chemical reactions take place in the cell.
	Controls what happens in the cell.

7A.3 What cells are like

Activity 1

- 4 Complete this table to show what each of the extra parts in a plant cell does.

Choose from these words:

chloroplast

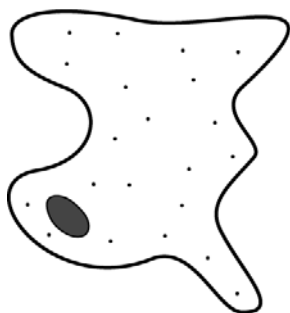
cell wall

vacuole

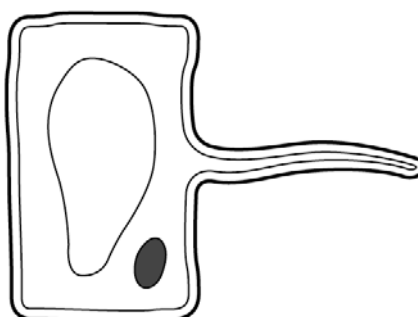
Cell part	The job that the cell part does
	Helps the plant cell to keep its shape.
	Stores water, sugars and salts in cell sap.
	Uses light energy to make food for the plant.

- 5 Look at the four different kinds of cell, A, B, C and D. For each one, write down whether it is an animal or a plant cell.

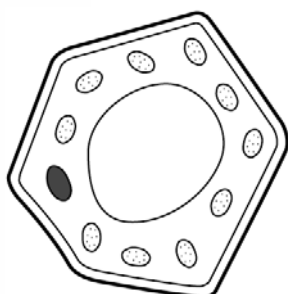
A



B



C



D